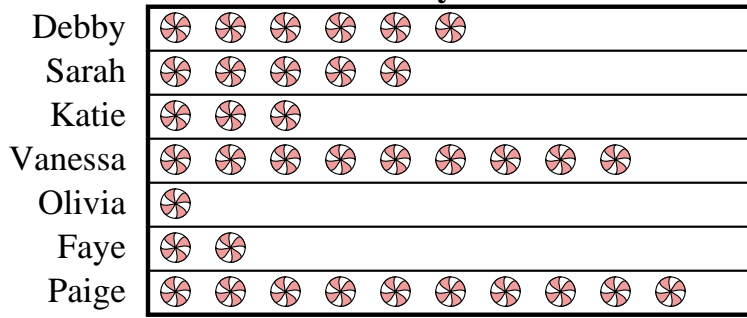




Katie and her friends were comparing the amount of candy they received on Halloween. They recorded their information in the pictograph below.

Candy Haul

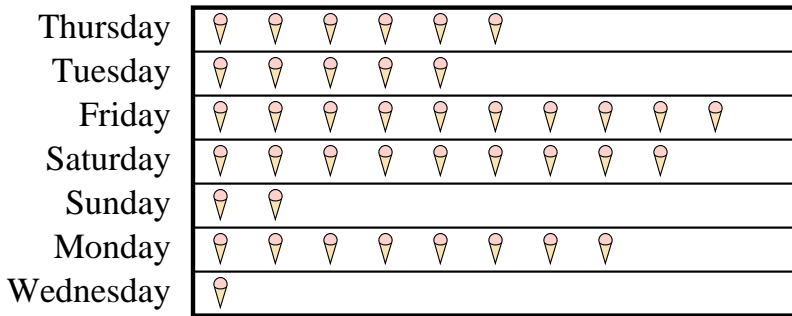


= 1 kilogram of candy

- Who got more candy, Debby or Sarah?
- How many kilograms of candy did Katie get?
- Who got the most candy?
- Who got exactly 9 kilograms of candy?
- Who got the least amount of candy?

At a fundraiser students from Mrs. Long's class were selling ice cream cones. Mrs. Long recorded their sales information in the pictograph below.

Cones Sold



= 6 Cones Sold

- How many ice cream cones did they sell on Friday?
- Which day did they sell the most ice cream cones?
- Which day did they sell exactly 54 ice cream cones?
- Did they sell more cones on Thursday or Tuesday?
- Which day did they sell the fewest ice cream cones?

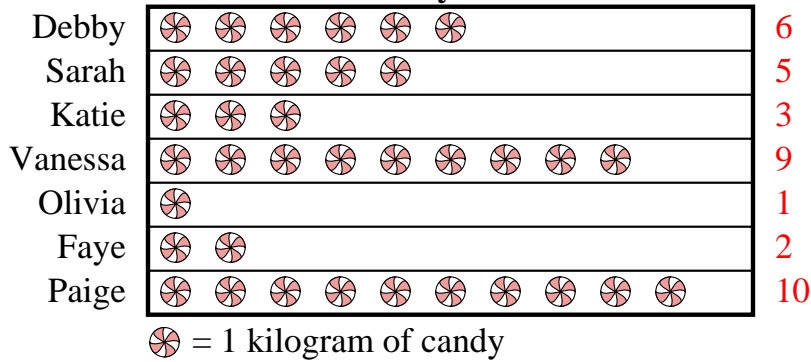
Answers

- _____
- _____
- _____
- _____
- _____
- _____
- _____
- _____
- _____
- _____



Katie and her friends were comparing the amount of candy they received on Halloween. They recorded their information in the pictograph below.

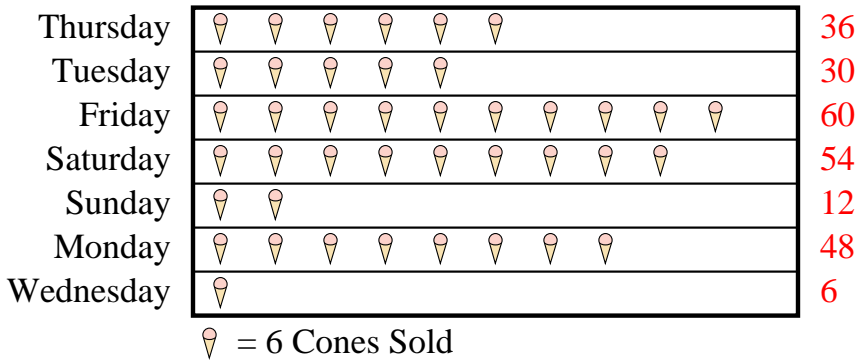
Candy Haul



- Who got more candy, Debby or Sarah?
- How many kilograms of candy did Katie get?
- Who got the most candy?
- Who got exactly 9 kilograms of candy?
- Who got the least amount of candy?

At a fundraiser students from Mrs. Long's class were selling ice cream cones. Mrs. Long recorded their sales information in the pictograph below.

Cones Sold



- How many ice cream cones did they sell on Friday?
- Which day did they sell the most ice cream cones?
- Which day did they sell exactly 54 ice cream cones?
- Did they sell more cones on Thursday or Tuesday?
- Which day did they sell the fewest ice cream cones?

Answers

- Debby
- 3
- Paige
- Vanessa
- Olivia
- 60
- Friday
- Saturday
- Thursday
- Wednesday